





Friday 5th February 2021

LO: to solve problems of weight and mass.


1) Mrs Mercer and Miss Brown have been weighing some animals using coins. Can you answer the questions below.

Toy animal	Mass in coins
sheep 	4
horse 	7
lion 	12
elephant 	19

- How much do the horse and sheep weigh altogether?
- How much would be lion and the horse weigh altogether?
- How much do the sheep, horse and lion weigh altogether?

2) Use the table above to work out if the scales will balance.

Will these scales balance?



3) Can you order the objects from heaviest to lightest?



Answers:

1 –

a- 11

b- 19

c- 23

2 – YES because the lion and the horse added together make 19

$$12 + 7 = 19$$

3- Teddy Bear, Sock and Ball (heaviest to lightest).

Thursday 4th February 2021

LO: to compare weight and mass.

Use the image of scales to draw an object and show how many cubes it would weigh. Can you write a sentence down to match it.

